


















# Grid references

Name: \_\_\_\_\_

A grid is used to help us find places or objects on a map. We divide a picture or map into blocks. The numbers and letters on the grid help us find the information we need to tell us where to put/find the information. This makes it easier to find places on a map of a big area.

## An example of a grid:

	1	2	3	4
A				
B				
C				
D				



**The blocks have letters and numerals (called coordinates). We are now able to say in which block each object is located.**

- The star is in A2
- The heart is in C4
- The crescent is in C2.

**Which block will you find the following object?**

- The pentagon
- The diamond
- The circle

# Activity 1


Complete the grid by matching each picture block to the grid coordinates given.

1. Point to A1 on the grid.
2. Find a picture block that says A1.
3. Copy what is in the block onto your grid, in the right place.
4. Now do the same with all the blocks on the grid.
5. What picture have you created? \_\_\_\_\_

	1	2	3	4		
A					<b>C3</b> 	<b>A4</b> 
B					<b>D3</b> 	<b>B2</b> 
C					<b>A2</b> 	<b>C4</b> 
D					<b>B1</b> 	<b>D2</b> 
		<b>C2</b> 	<b>D4</b> 	<b>B4</b> 		
	<b>D1</b> 	<b>A1</b> 	<b>B3</b> 	<b>C1</b> 	<b>A3</b> 	

## Activity 2

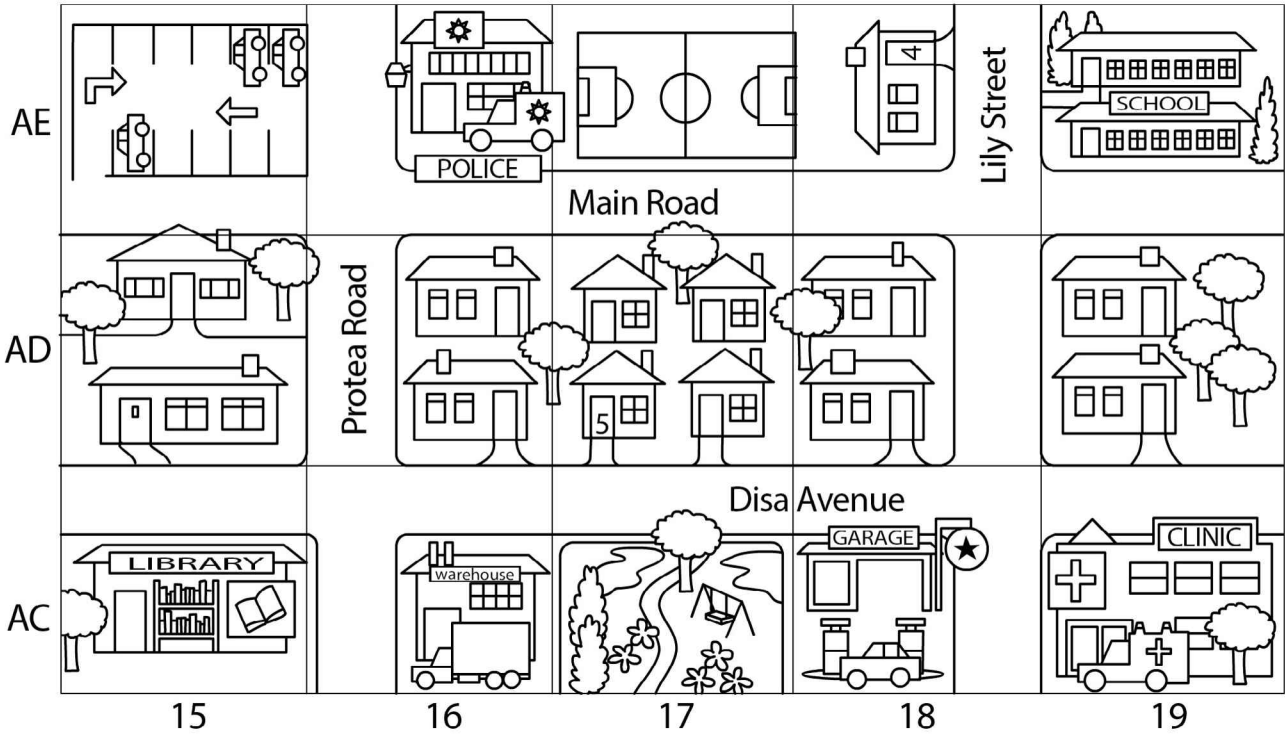
Where does each animal listed appear on this grid? Write down the name of the block. The first one has been done for you.



- The hippo is in B3
- The tortoise is in \_\_\_\_\_
- The ant is in \_\_\_\_\_
- The jackal is in \_\_\_\_\_
- The \_\_\_\_\_ is in D1
- The \_\_\_\_\_ is in E3
- The \_\_\_\_\_ is in A5
- The \_\_\_\_\_ is in C4

# Activity 3

Look at the map



Fill in the missing spaces in the table.

Grid Reference	Place on map
	5 Disa Avenue
	School
	Library
16 AC	
19 AD	
	4 Lily street
	Clinic
15 AE	
	Police station